

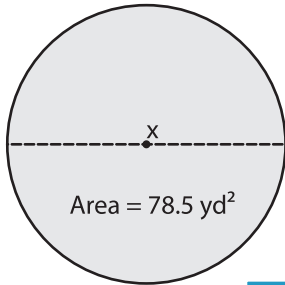
Name : \_\_\_\_\_

## Area – Mixed Shapes

Sheet 2

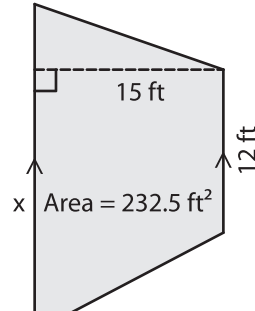
Find  $x$ . (Use  $\pi = 3.14$ )

1)

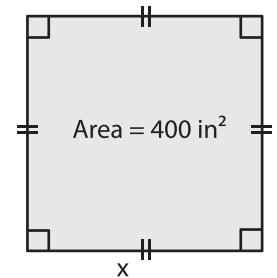


$x =$  \_\_\_\_\_

2)

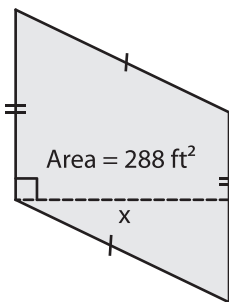


3)



$x =$  \_\_\_\_\_

4)



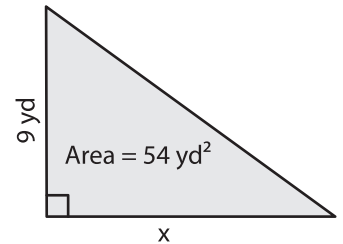
$x =$  \_\_\_\_\_

**PREVIEW**  
Gain complete access to the largest collection of worksheets in all subjects!

Members, please log in to download this worksheet.

Not a member? Please sign up to gain complete access.

[www.mathworksheets4kids.com](http://www.mathworksheets4kids.com)



$x =$  \_\_\_\_\_

7) A circle has an area of 3

\_\_\_\_\_

8) The area of a trapezoid is 46 square yards. If the height is 4 yards and the length of one of the bases is 16 yards, determine the length of the other base.

\_\_\_\_\_