

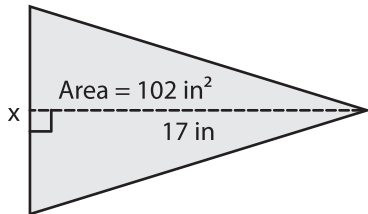
Name : _____

Area – Mixed Shapes

Sheet 3

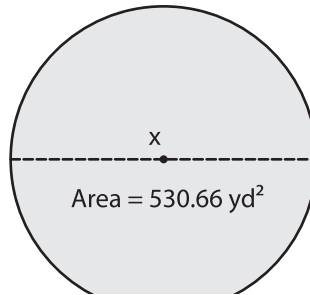
Find x . (Use $\pi = 3.14$)

1)

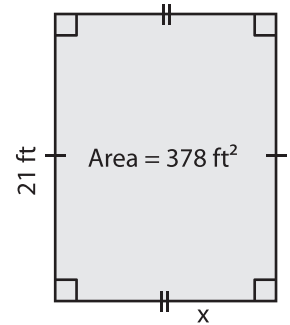


$x =$ _____

2)

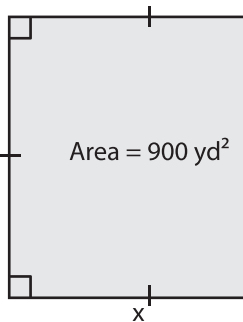


3)



$x =$ _____

4)



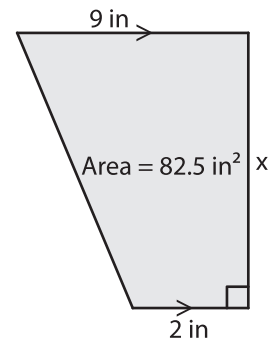
$x =$ _____

PREVIEW
Gain complete access to the largest collection of worksheets in all subjects!

Members, please log in to download this worksheet.

Not a member? Please sign up to gain complete access.

www.mathworksheets4kids.com



$x =$ _____

7) If a square has an area of _____

8) The base of a parallelogram is 21 yards. Find the height, if the area of the parallelogram is 525 square yards.
