

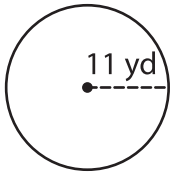
Name : \_\_\_\_\_

## Area – Mixed Shapes

L2S1

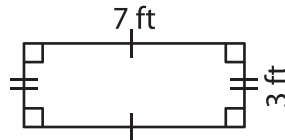
Find the area of each shape. (Use  $\pi = 3.14$ )

1)



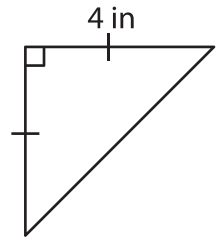
Area = \_\_\_\_\_

2)

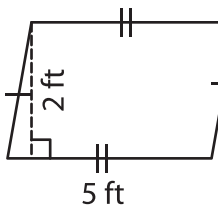


Area = \_\_\_\_\_

3)



4)



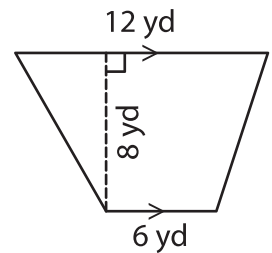
Area = \_\_\_\_\_

**PREVIEW**  
Gain complete access to the largest collection of worksheets in all subjects!

Members, please log in to download this worksheet.

Not a member? Please sign up to gain complete access.

[www.mathworksheets4kids.com](http://www.mathworksheets4kids.com)



Area = \_\_\_\_\_

7) If the side of a square

\_\_\_\_\_

8) A rectangle is 20 inches long and 13 inches wide. Find the area of the rectangle.

\_\_\_\_\_