

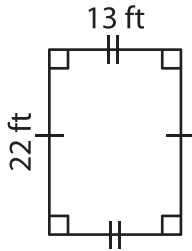
Name : _____

Area – Mixed Shapes

L2S2

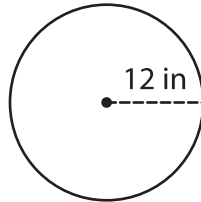
Find the area of each shape. (Use $\pi = 3.14$)

1)



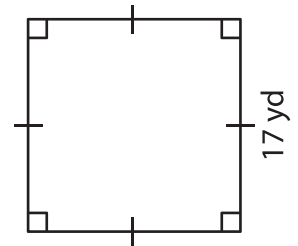
Area = _____

2)

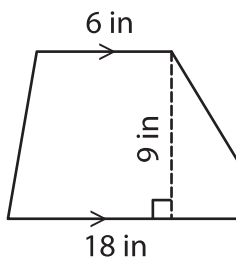


Area = _____

3)



4)



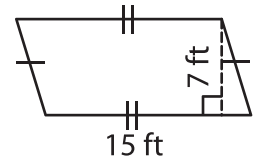
Area = _____

PREVIEW
Gain complete access to the largest collection of worksheets in all subjects!

Members, please log in to download this worksheet.

Not a member? Please sign up to gain complete access.

www.mathworksheets4kids.com



Area = _____

7) The base and height of

the area of the triangle.

8) What is the area of the circle whose radius is 2 feet?