

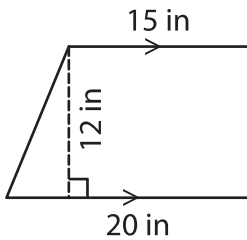
Name : _____

Area – Mixed Shapes

L2S3

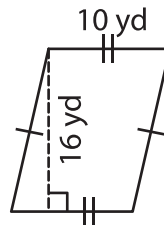
Find the area of each shape. (Use $\pi = 3.14$)

1)



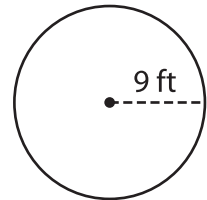
Area = _____

2)

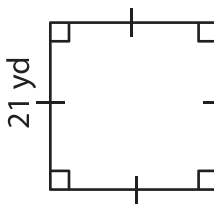


Area = _____

3)



4)



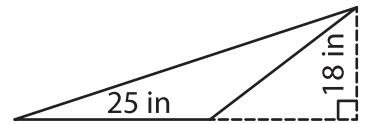
Area = _____

PREVIEW
Gain complete access to the largest collection of worksheets in all subjects!

Members, please log in to download this worksheet.

Not a member? Please sign up to gain complete access.

www.mathworksheets4kids.com



Area = _____

7) Determine the area of a parallelogram with a base of 8 inches and a height of 6 inches respectively.

Area = _____

8) The height of a trapezoid is 12 yards. If the lengths of the parallel bases are 7 yards and 3 yards, what is the area of the trapezoid?