

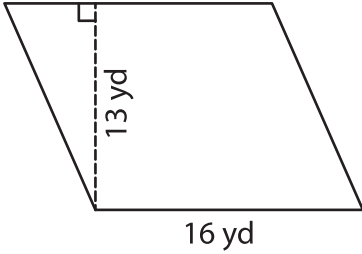
Name : _____

Parallelogram – Area

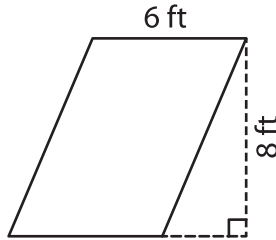
T2L1S2

A) Find the area of each parallelogram.

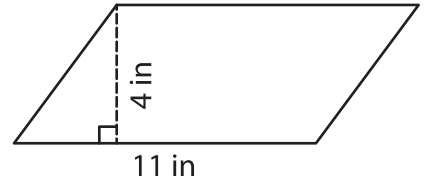
1)



2)



3)



Area = _____

Area = _____

B) Find the area of each parallelogram.

4) base = 15 in , height = 10 in

9 yd

Area = _____

6) base = 3 yd , height = 5 yd

ft

Area = _____

8) The base and height of a parallelogram are 12 yd and 8 yd.

Find the area of the parallelogram.

9) The height of a parallelogram is 7 yards and the base is 12 yards. Determine the area of the parallelogram.

PREVIEW

Gain complete access to the largest collection of worksheets in all subjects!

Members, please log in to download this worksheet.

Not a member? Please sign up to gain complete access.

www.mathworksheets4kids.com