

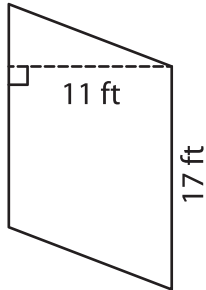
Name : \_\_\_\_\_

## Parallelogram – Area

T2L1S5

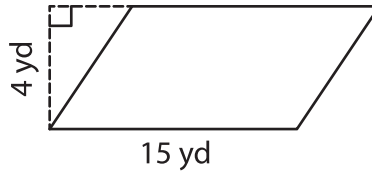
A) Find the area of each parallelogram.

1)



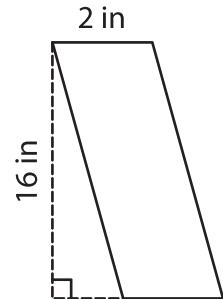
Area = \_\_\_\_\_

2)



Area = \_\_\_\_\_

3)



B) Find the area of each parallelogram.

4) base = 8 yd , height = 12 yd

Area = \_\_\_\_\_

6) base = 20 in , height = 5 in

Area = \_\_\_\_\_

8) A parallelogram has a base of 10 feet and a height of 7 feet.

Area of parallelogram.

# PREVIEW

Gain complete access to the largest collection of worksheets in all subjects!

Members, please log in to download this worksheet.

Not a member? Please sign up to gain complete access.

[www.mathworksheets4kids.com](http://www.mathworksheets4kids.com)

9) Determine the area of parallelogram, if base and height of the parallelogram are 10 feet and 7 feet.