

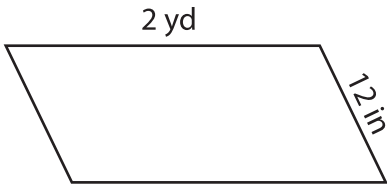
Name : _____

Perimeter of a Parallelogram

Sheet 1

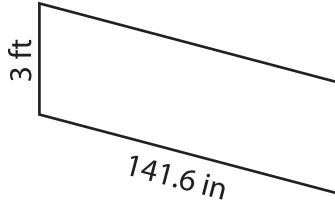
Find the perimeter of each parallelogram.

1)

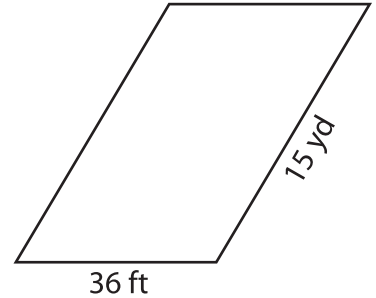


Perimeter = _____

2)

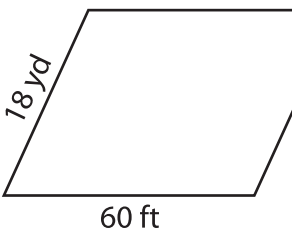


3)



Perimeter = _____ yd

4)



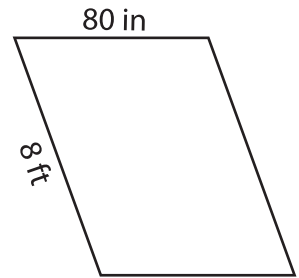
Perimeter = _____

PREVIEW
Gain complete access to the largest collection of worksheets in all subjects!

Members, please log in to download this worksheet.

Not a member? Please sign up to gain complete access.

www.mathworksheets4kids.com



Perimeter = _____ in

7) What is the perimeter of

yards and 4 feet?

_____ feet

8) If the lengths of the adjacent sides of a parallelogram are 14 yards and 252 inches, determine the perimeter of the parallelogram.

_____ yards