

Name : _____

Perimeter of a Parallelogram

Sheet 2

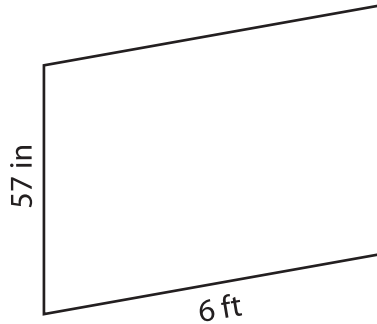
Find the perimeter of each parallelogram.

1)

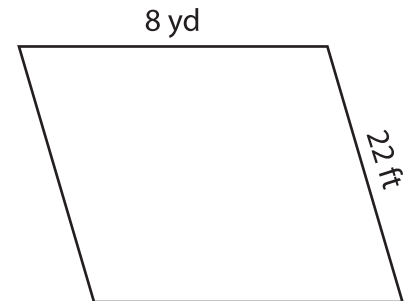


Perimeter = _____

2)



3)



Perimeter = _____ ft

4)



Perimeter = _____

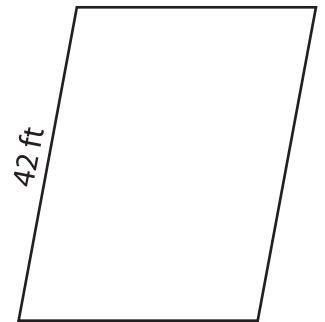
PREVIEW

Gain complete access to the largest collection of worksheets in all subjects!

Members, please log in to download this worksheet.

Not a member? Please sign up to gain complete access.

www.mathworksheets4kids.com



Perimeter = _____ yd

7) Find the perimeter of the

es and 5 feet.

_____ inches

8) The adjacent sides of a parallelogram measure 3 yards and 34 feet. What is the perimeter of the parallelogram?

_____ feet