

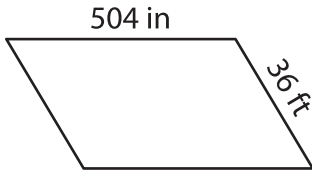
Name : _____

Perimeter of a Parallelogram

Sheet 3

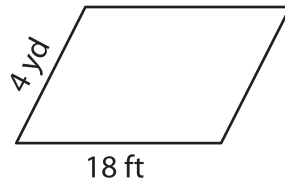
Find the perimeter of each parallelogram.

1)

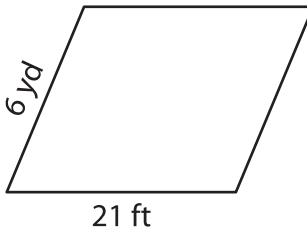


Perimeter = _____

2)



4)



Perimeter = _____

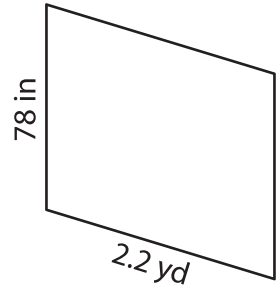
7) The lengths of the adjacent sides of the parallelogram are 120 yards and 180 yards.

_____ yards

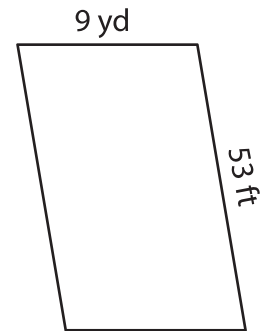
8) Find the perimeter of the parallelogram whose adjacent sides measure 97 inches and 2.4 yards.

_____ inches

3)



Perimeter = _____ in



Perimeter = _____ ft

_____ yds. Determine the perimeter

PREVIEW

Gain complete access to the largest collection of worksheets in all subjects!

Members, please log in to download this worksheet.

Not a member? Please sign up to gain complete access.

www.mathworksheets4kids.com