

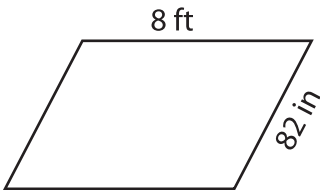
Name : \_\_\_\_\_

## Perimeter of a Parallelogram

Sheet 4

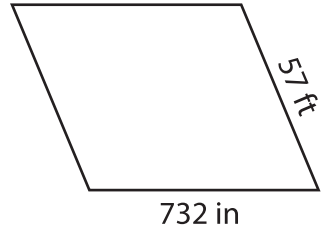
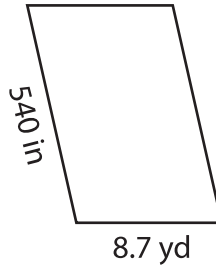
Find the perimeter of each parallelogram.

1)



Perimeter = \_\_\_\_\_

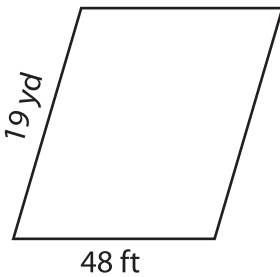
2)



3)

Perimeter = \_\_\_\_\_ ft

4)



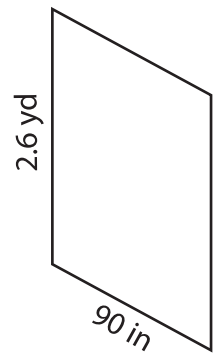
Perimeter = \_\_\_\_\_

**PREVIEW**  
Gain complete access to the largest collection of worksheets in all subjects!

Members, please log in to download this worksheet.

Not a member? Please sign up to gain complete access.

[www.mathworksheets4kids.com](http://www.mathworksheets4kids.com)



Perimeter = \_\_\_\_\_ in

7) If the lengths of the adjacent sides are \_\_\_\_\_ feet

\_\_\_\_\_ feet, find the perimeter of the

8) What is the perimeter of the parallelogram, if the lengths of adjacent sides are 64 inches and 4 feet?

\_\_\_\_\_ inches