

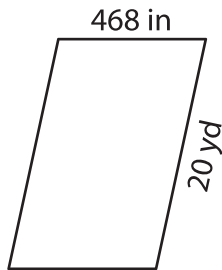
Name : _____

Perimeter of a Parallelogram

Sheet 5

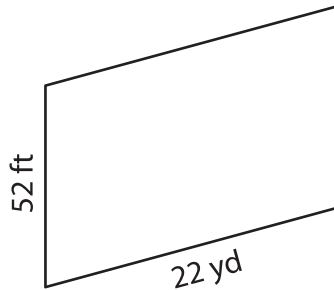
Find the perimeter of each parallelogram.

1)



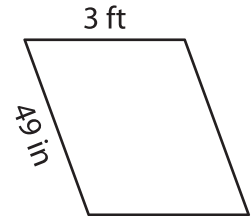
Perimeter = _____

2)

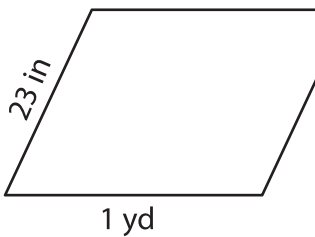


Perimeter = _____ in

3)



4)



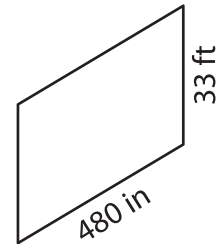
Perimeter = _____

PREVIEW
Gain complete access to the largest collection of worksheets in all subjects!

Members, please log in to download this worksheet.

Not a member? Please sign up to gain complete access.

www.mathworksheets4kids.com



Perimeter = _____ ft

7) What is the perimeter of

_____ inches and 4.8 feet?

_____ inches

8) The adjacent sides of a parallelogram measure 16 yards and 504 inches. Find the perimeter of the parallelogram.

_____ yards