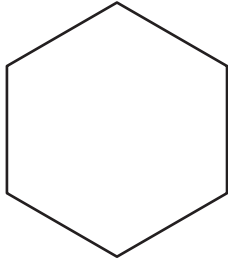


Name : \_\_\_\_\_

# Polygon - Side Length

Find the side length of each regular polygon. Round your answer to the nearest tenth.

1)

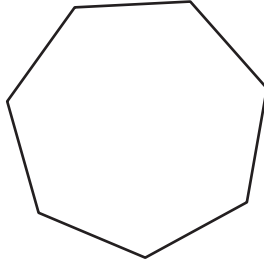


Perimeter = 73

Number of sides = \_\_\_\_\_

Length of each side = \_\_\_\_\_

2)

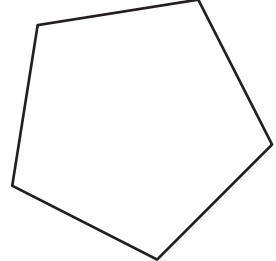


Perimeter = 56.5 ft

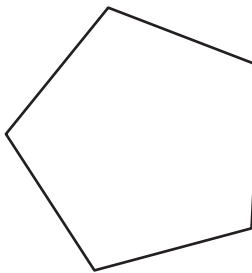
Number of sides = \_\_\_\_\_

Length of each side = \_\_\_\_\_

3)




4)



Perimeter = 3

Number of sides = \_\_\_\_\_

Length of each side = \_\_\_\_\_

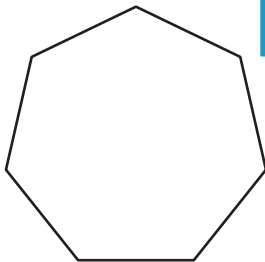


Perimeter = 47.1 in

Number of sides = \_\_\_\_\_

Length of each side = \_\_\_\_\_

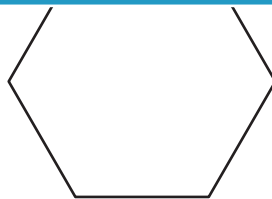
7)



Perimeter = 97.4 ft

Number of sides = \_\_\_\_\_

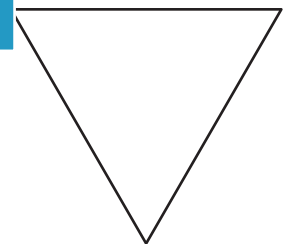
Length of each side = \_\_\_\_\_



Perimeter = 68.7 yd

Number of sides = \_\_\_\_\_

Length of each side = \_\_\_\_\_



Perimeter = 21.8 in

Number of sides = \_\_\_\_\_

Length of each side = \_\_\_\_\_

**PREVIEW**

Gain complete access to the largest collection of worksheets in all subjects!

Members, please log in to download this worksheet.

Not a member? Please sign up to gain complete access.

[www.mathworksheets4kids.com](http://www.mathworksheets4kids.com)