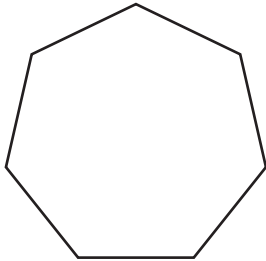


Name : \_\_\_\_\_

## Polygon - Side Length

Find the side length of each regular polygon. Round your answer to the nearest tenth.

1)

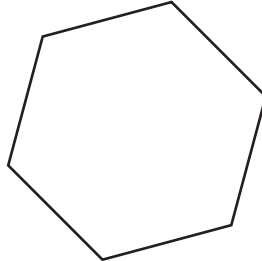


Perimeter = 28

Number of sides = \_\_\_\_\_

Length of each side = \_\_\_\_\_

2)

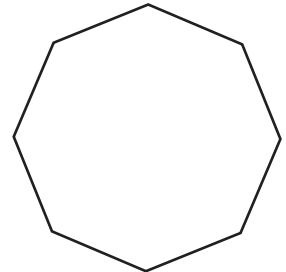


Perimeter = 54 ft


Number of sides = \_\_\_\_\_

Length of each side = \_\_\_\_\_

3)



4)



Perimeter = 17

Number of sides = \_\_\_\_\_

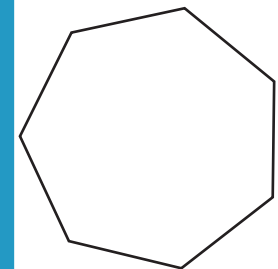
Length of each side = \_\_\_\_\_

**PREVIEW**  
Gain complete access to the largest collection of worksheets in all subjects!

Members, please log in to download this worksheet.

Not a member? Please sign up to gain complete access.

[www.mathworksheets4kids.com](http://www.mathworksheets4kids.com)

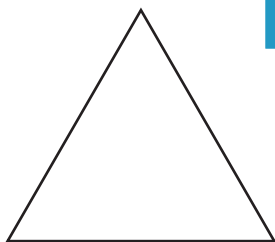


Perimeter = 32.4 in

Number of sides = \_\_\_\_\_

Length of each side = \_\_\_\_\_


7)



Perimeter = 46.7 in

Number of sides = \_\_\_\_\_

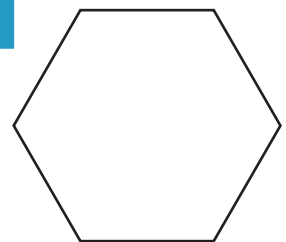
Length of each side = \_\_\_\_\_



Perimeter = 90.5 ft

Number of sides = \_\_\_\_\_

Length of each side = \_\_\_\_\_



Perimeter = 76.1 yd

Number of sides = \_\_\_\_\_

Length of each side = \_\_\_\_\_