

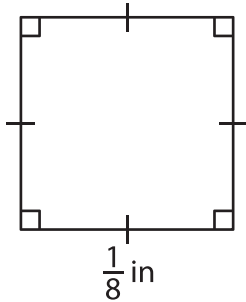
Name : \_\_\_\_\_

## Area – Quadrilateral

L2S1

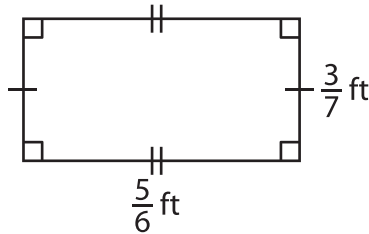
Find the area of each quadrilateral.

1)



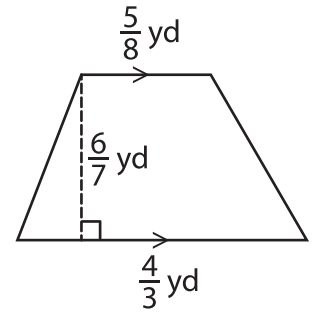
Area = \_\_\_\_\_

2)

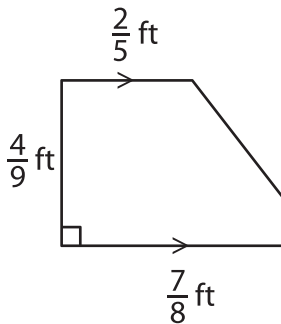


Area = \_\_\_\_\_

3)



4)



Area = \_\_\_\_\_

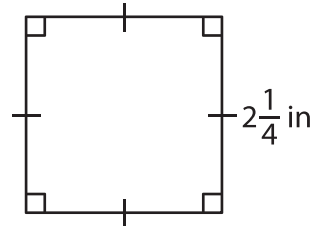
**PREVIEW**

Gain complete access to the largest collection of worksheets in all subjects!

Members, please log in to download this worksheet.

Not a member? Please sign up to gain complete access.

[www.mathworksheets4kids.com](http://www.mathworksheets4kids.com)



Area = \_\_\_\_\_

7) Determine the area of a parallelogram with base  $\frac{6}{5}$  inches and height  $\frac{7}{5}$  inches respectively.

Area = \_\_\_\_\_

8) A rectangle is  $\frac{3}{5}$  yard long and  $\frac{1}{3}$  yard wide. Find the area of the rectangle.