

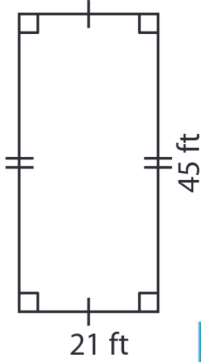
Name : \_\_\_\_\_

## Area – Quadrilateral

L1S1

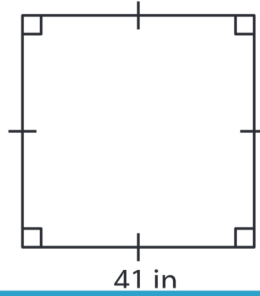
Find the area of each quadrilateral.

1)



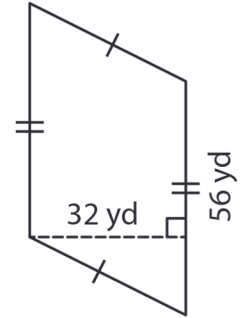
Area = \_\_\_\_\_

2)

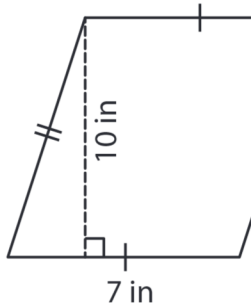


Area = \_\_\_\_\_

3)



4)



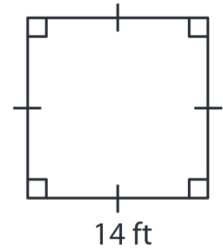
Area = \_\_\_\_\_

Gain complete access to the largest collection of worksheets in all subjects!

Members, please log in to download this worksheet.

Not a member? Please sign up to gain complete access.

[www.mathworksheets4kids.com](http://www.mathworksheets4kids.com)



Area = \_\_\_\_\_

7) The length and width of a rectangle are 12 ft and 8 ft respectively. Determine the area of the rectangle.

8) Determine the area of the parallelogram with a base of 15 ft and a height of 10 ft.

\_\_\_\_\_

8) If the height and the base of a parallelogram are 43 feet and 24 feet respectively, find the area of the parallelogram.

\_\_\_\_\_