

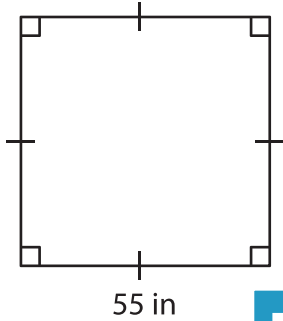
Name : _____

Area – Quadrilateral

L1S3

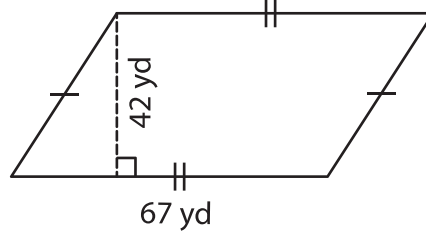
Find the area of each quadrilateral.

1)



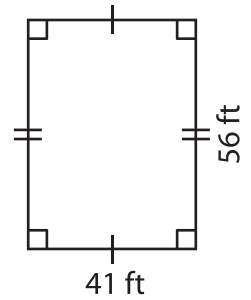
Area = _____

2)

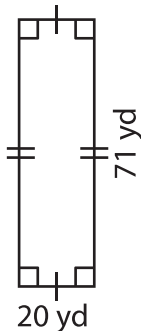


Area = _____

3)



4)



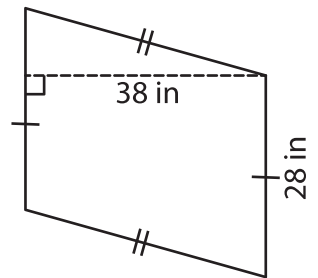
Area = _____

Gain complete access to the largest collection of worksheets in all subjects!

Members, please log in to download this worksheet.

Not a member? Please sign up to gain complete access.

www.mathworksheets4kids.com



Area = _____

7) A parallelogram has a l

area of the parallelogram?

8) If the side of a square measures 33 feet, determine the area of the square.