

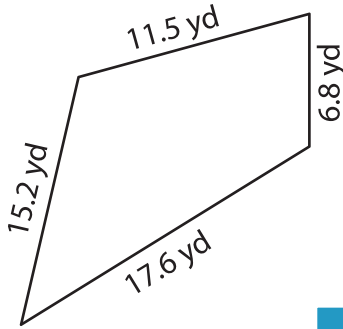
Name : \_\_\_\_\_

T2S4

# Perimeter of a Quadrilateral

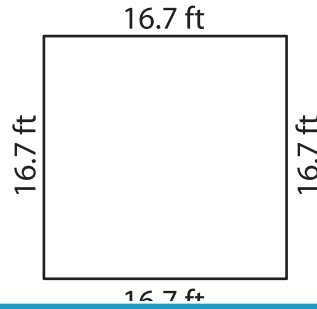
Find the perimeter of each quadrilateral.

1)

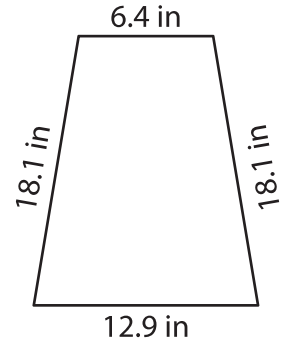


Perimeter = \_\_\_\_\_

2)

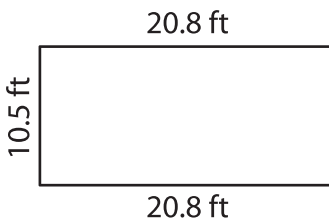


3)



Perimeter = \_\_\_\_\_

4)



Perimeter = \_\_\_\_\_

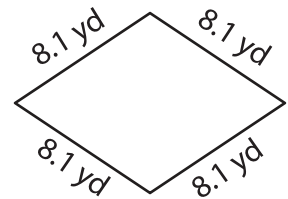
**PREVIEW**

Gain complete access to the largest collection of worksheets in all subjects!

Members, please log in to download this worksheet.

Not a member? Please sign up to gain complete access.

[www.mathworksheets4kids.com](http://www.mathworksheets4kids.com)



Perimeter = \_\_\_\_\_

7) Find the perimeter of the

\_\_\_\_\_

8) The adjacent sides of a parallelogram measure 11.9 inches and 13.5 inches. Determine the perimeter of the parallelogram.

\_\_\_\_\_