

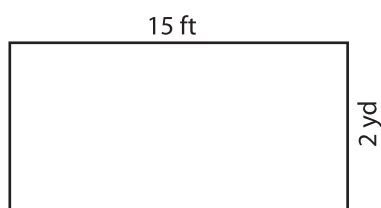
Name : _____

T151

Area of a Rectangle

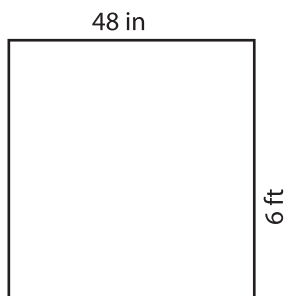
Find the area of each rectangle.

1)



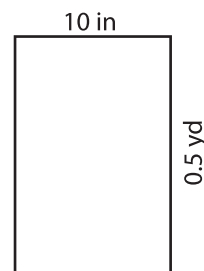
Area = _____ y

2)

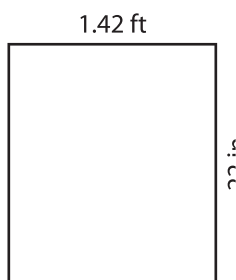


= _____ in²

3)



4)




Area = _____ in

Gain complete access to the largest collection of worksheets in all subjects!

Members, please log in to download this worksheet.


Not a member? Please sign up to gain complete access.

www.mathworksheets4kids.com




= _____ ft²

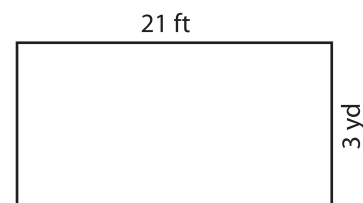
7)



Area = _____ ft²



Area = _____ yd²



Area = _____ yd²