

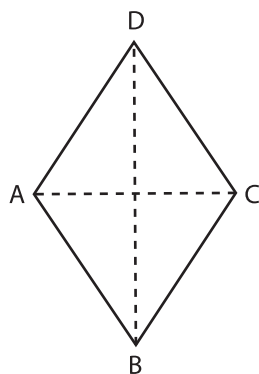
Name : _____

Area of a Rhombus

T1L1S1

Find the area of each rhombus.

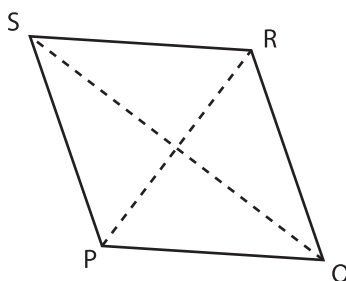
1)



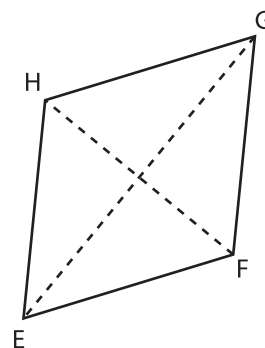
$AC = 2$ yd ; $BD = 8$ yd

Area = _____

2)



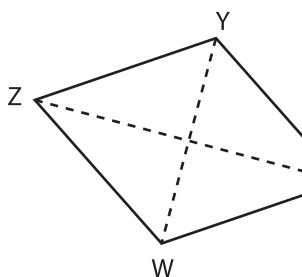
3)



$EG = 12$ ft ; $FH = 5$ ft

Area = _____

4)



$XZ = 7$ in ; $WY = 3$ in

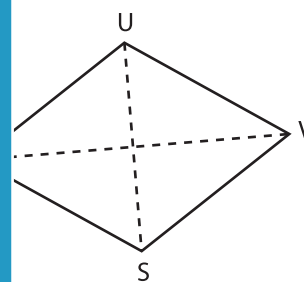
Area = _____

PREVIEW
Gain complete access to the largest collection of worksheets in all subjects!

Members, please log in to download this worksheet.

Not a member? Please sign up to gain complete access.

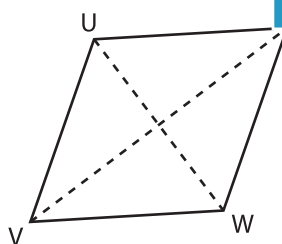
www.mathworksheets4kids.com



$UV = 16$ yd ; $SU = 9$ yd

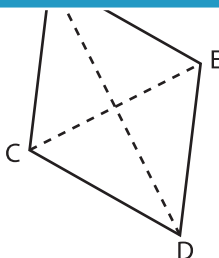
Area = _____

7)



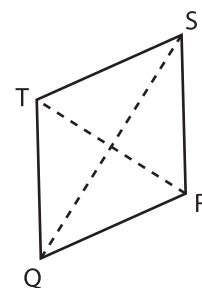
$UW = 11$ ft ; $TV = 13$ ft

Area = _____



$DF = 18$ yd ; $CE = 8$ yd

Area = _____



$QS = 17$ in ; $RT = 14$ in

Area = _____