

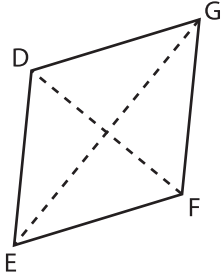
Name : _____

Area of a Rhombus

T1L1S2

Find the area of each rhombus.

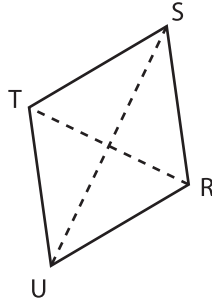
1)



$EG = 15 \text{ in}$; $DF = 4 \text{ in}$

Area = _____

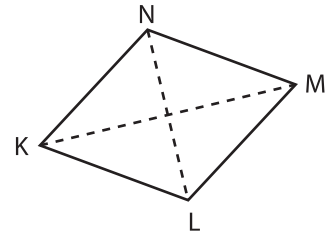
2)



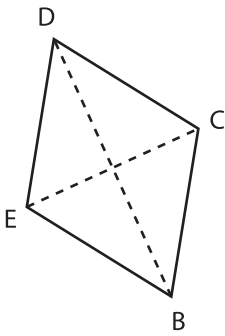
$RS = 16 \text{ ft}$; $LN = 13 \text{ ft}$

Area = _____

3)



4)



$CE = 1 \text{ yd}$; $BD = 8 \text{ yd}$

Area = _____

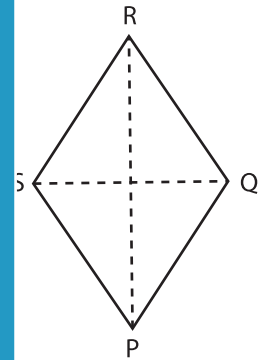
PREVIEW

Gain complete access to the largest collection of worksheets in all subjects!

Members, please log in to download this worksheet.

Not a member? Please sign up to gain complete access.

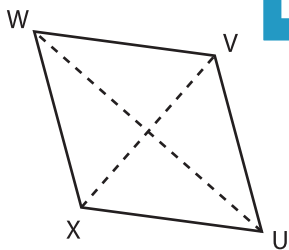
www.mathworksheets4kids.com



$RS = 11 \text{ in}$; $QS = 10 \text{ in}$

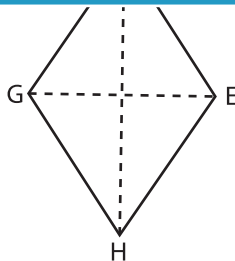
Area = _____

7)



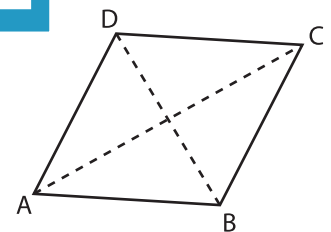
$VX = 16 \text{ ft}$; $UW = 17 \text{ ft}$

Area = _____



$FH = 19 \text{ in}$; $EG = 7 \text{ in}$

Area = _____



$BD = 3 \text{ yd}$; $AC = 9 \text{ yd}$

Area = _____