

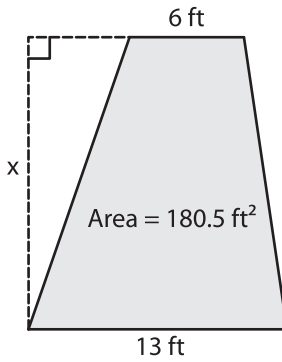
Name : _____

Trapezoid - Area

L1S1

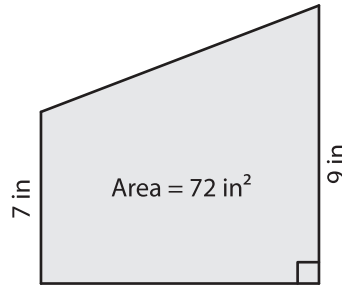
Find x.

1)

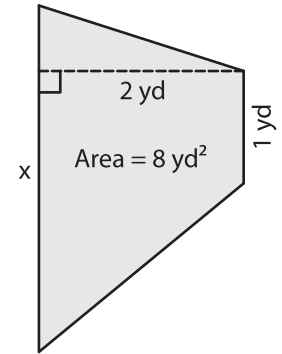


$x =$ _____

2)

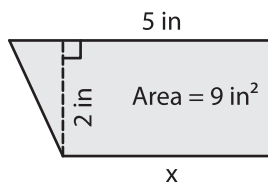


3)



$x =$ _____

4)



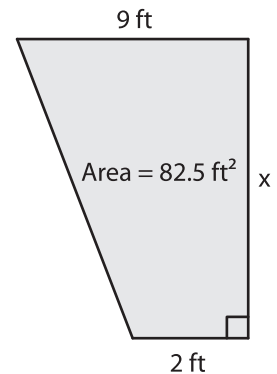
$x =$ _____

PREVIEW
Gain complete access to the largest collection of worksheets in all subjects!

Members, please log in to download this worksheet.

Not a member? Please sign up to gain complete access.

www.mathworksheets4kids.com



$x =$ _____

7) A trapezoid has an area of 100 square feet and one of the parallel bases is 11 yards

and the other parallel base is 10 yards and one of the

8) The sum of the parallel bases of a trapezoid is 15 feet. If the area of the trapezoid is 7.5 square feet, determine the height.