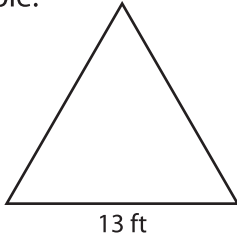


Name : _____

Area of an Equilateral Triangle

T1S4

Example:



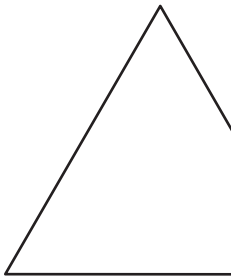
$$\text{Area of an equilateral triangle} = \frac{\sqrt{3}}{4} a^2$$

$$a = 13 \text{ ft}$$

$$\begin{aligned} \text{Area} &= \frac{\sqrt{3}}{4} \times 13 \times 13 \\ &= \mathbf{73.18 \text{ ft}^2} \end{aligned}$$

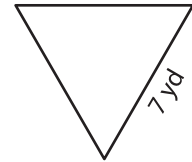
Find the area of each equilateral triangle. Round your answer to two decimal places.

1)




Area =

2)



Area =

4)



Area =

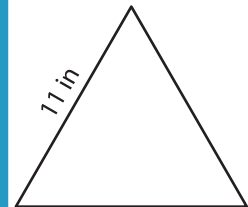
PREVIEW

Gain complete access to the largest collection of worksheets in all subjects!

Members, please log in to download this worksheet.

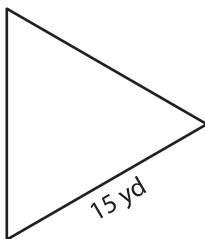
Not a member? Please sign up to gain complete access.

www.mathworksheets4kids.com

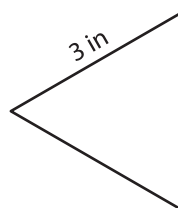


Area =

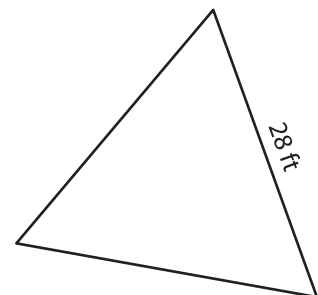
7)



Area =



Area =



Area =