

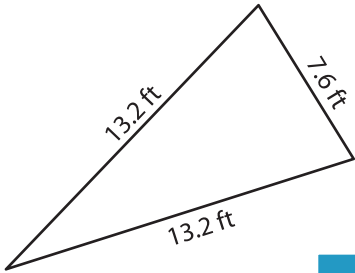
Name : _____

Perimeter of a Triangle

T2S3

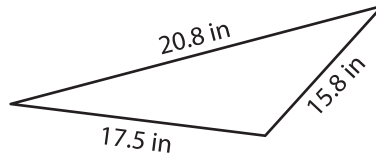
Find the perimeter of each triangle.

1)



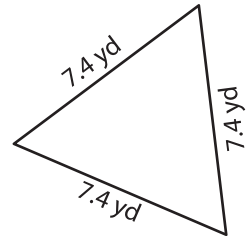
Perimeter = _____

2)

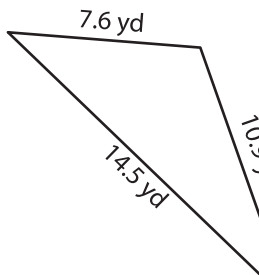


Perimeter = _____

3)



4)

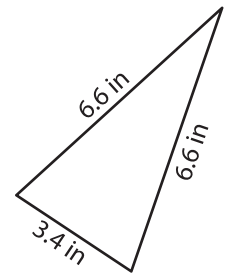


Perimeter = _____

Perimeter = _____

7) The base of an isosceles triangle is 3.4 in. The two equal sides measure 6.6 in each.

What is the perimeter of the isosceles triangle, if



PREVIEW

Gain complete access to the largest collection of worksheets in all subjects!

Members, please log in to download this worksheet.

Not a member? Please sign up to gain complete access.

www.mathworksheets4kids.com

8) What is the perimeter of the triangle, if the side lengths of the triangle are 16.3 feet, 19.4 feet and 13.5 feet?