

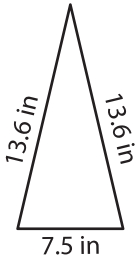
Name : \_\_\_\_\_

## Perimeter of a Triangle

T2S4

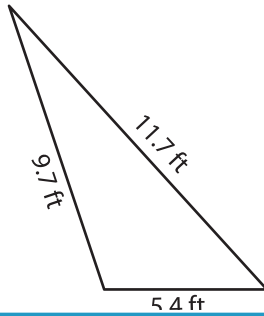
Find the perimeter of each triangle.

1)



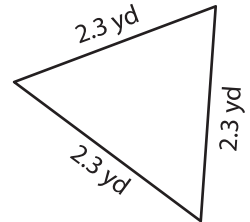
Perimeter = \_\_\_\_\_

2)

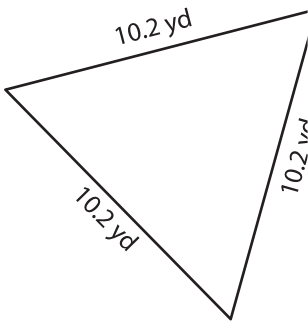


Perimeter = \_\_\_\_\_

3)



4)



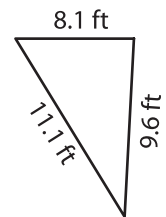
Perimeter = \_\_\_\_\_

Gain complete access to the largest collection of worksheets in all subjects!

Members, please log in to download this worksheet.

Not a member? Please sign up to gain complete access.

[www.mathworksheets4kids.com](http://www.mathworksheets4kids.com)



Perimeter = \_\_\_\_\_

7) The side lengths of a triangle are 10.2 yd, 10.2 yd, and 10.2 yd. Find its perimeter.

\_\_\_\_\_

8) The length of each of the two equal sides of an isosceles triangle is 4.5 feet. Determine the perimeter, if the base measures 8.7 feet.

\_\_\_\_\_