

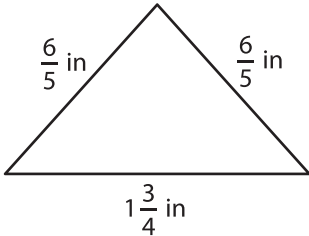
Name : _____

Perimeter of a Triangle

T2S1

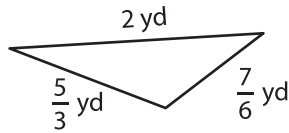
Find the perimeter of each triangle.

1)

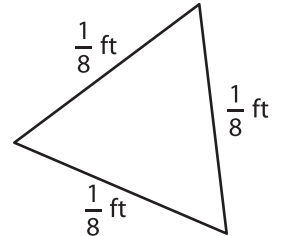


Perimeter =

2)

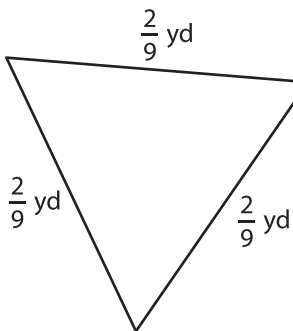


3)



Perimeter =

4)



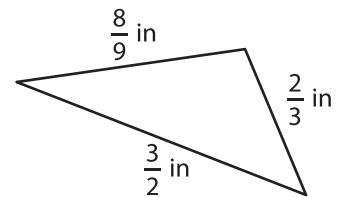
Perimeter =

PREVIEW
Gain complete access to the largest collection of worksheets in all subjects!

Members, please log in to download this worksheet.

Not a member? Please sign up to gain complete access.

www.mathworksheets4kids.com



Perimeter =

7) The side lengths of a triangle are $\frac{1}{2}$ in, $\frac{1}{3}$ in, and $\frac{1}{4}$ in. Find its perimeter.

Perimeter =

8) Find the perimeter of the triangle, if the side lengths of the triangle are $\frac{7}{2}$ feet, $\frac{5}{4}$ feet and $2\frac{2}{3}$ feet.