

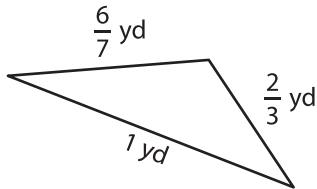
Name : _____

Perimeter of a Triangle

T2S4

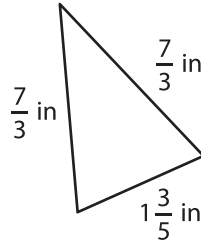
Find the perimeter of each triangle.

1)

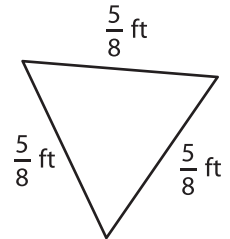


Perimeter =

2)

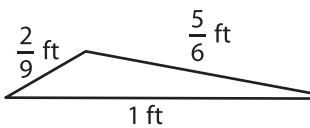


3)



Perimeter =

4)



Perimeter =

7) The side length of an equilateral triangle is $\frac{2}{3}$ ft.

8) Determine the perimeter of the triangle whose side lengths are $\frac{1}{7}$ inch, $\frac{1}{4}$ inch and $\frac{3}{8}$ inch.

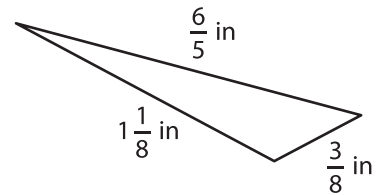
PREVIEW

Gain complete access to the largest collection of worksheets in all subjects!

Members, please log in to download this worksheet.

Not a member? Please sign up to gain complete access.

www.mathworksheets4kids.com



Perimeter =