






Name : _____

Ordered Pairs

All quadrants: S2



A) Write the ordered pair for each item plotted at each ordered pair.

- 1)  _____
 - 2)  _____
 - 3)  _____
 - 4)  _____
 - 5)  _____
- 1) (3, 2) _____
- 8) (0, 4) _____
- 9) (3, -4) _____
- 10) (-4, 3) _____