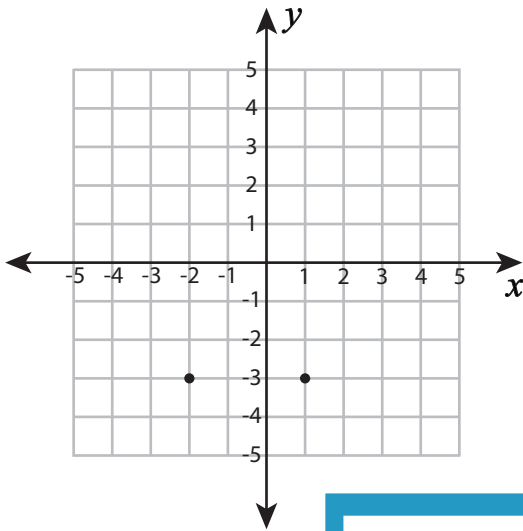


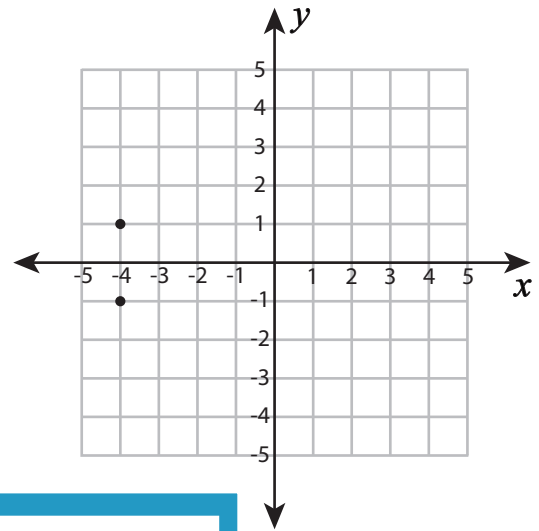
Plot each set of ordered pairs. Join the points and find the length of the line segment.

1) $(-2, -3), (1, -3)$



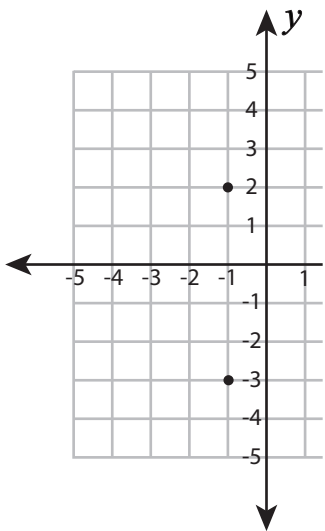
Length of the line segment = _____

2) $(-4, 1), (-4, -1)$

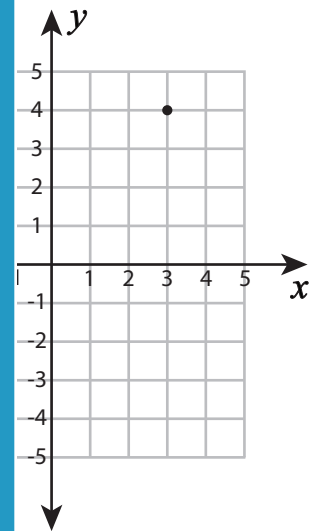


Length of the line segment = _____

3) $(-1, 2), (-1, -3)$



Length of the line segment = _____



Length of the line segment = _____

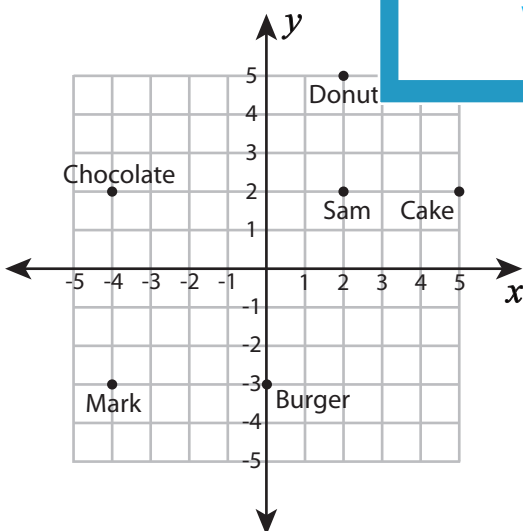
PREVIEW

Gain complete access to the largest collection of worksheets in all subjects!

Members, please log in to download this worksheet.

Not a member? Please sign up to gain complete access.

www.mathworksheets4kids.com



6) Help Mark to reach the burger shop in the shortest way. Show the route on the map.

7) Who is closer to the chocolate shop, Mark or Sam? _____