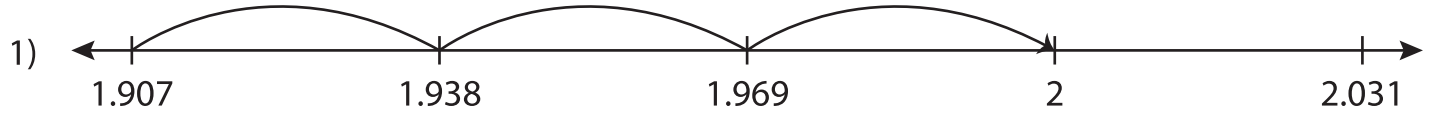


Name : \_\_\_\_\_

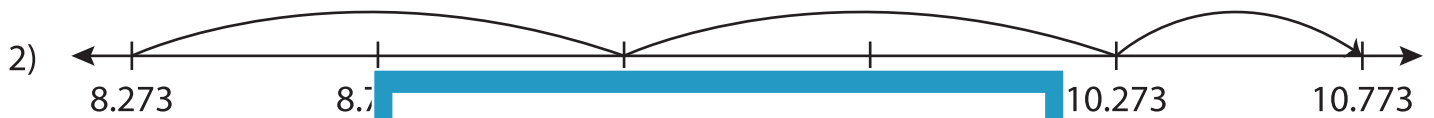
## Addition Sentence - Missing Numbers

3addends-thousandth: S2

Complete the addition sentence that describes each model.



$$1.907 + 0.031 + \underline{\hspace{1cm}} = 2$$



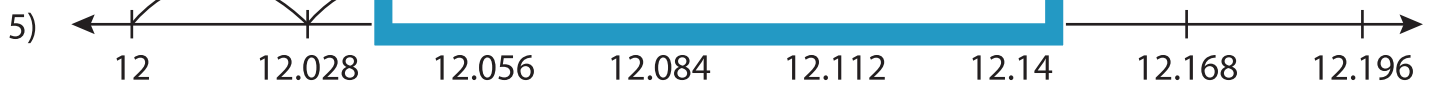
\_\_\_\_\_



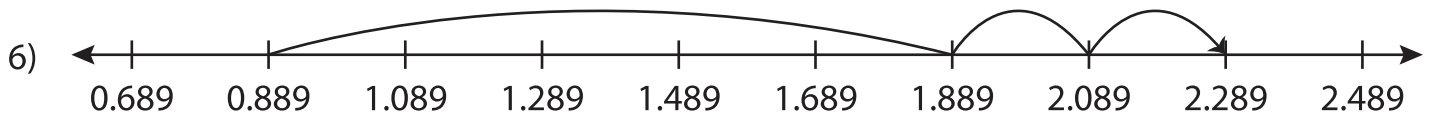
6.406



7.032



$$\underline{\hspace{1cm}} + 0.084 + 0.056 = 12.14$$



$$0.889 + 1 + \underline{\hspace{1cm}} = 2.289$$

**PREVIEW**

Gain complete access to the largest collection of worksheets in all subjects!

Members, please log in to download this worksheet.

Not a member? Please sign up to gain complete access.

[www.mathworksheets4kids.com](http://www.mathworksheets4kids.com)