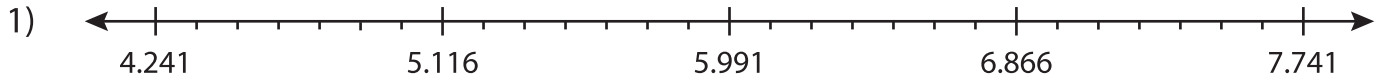


Name : _____

Decimal Addition

Thousandth: S1

Solve using number line.



a) $6.491 + 0.25 =$ _____

b) $6.616 + 0.75 =$ _____

c) $5.741 + 1.125 =$ _____

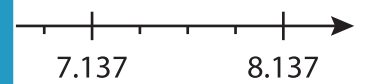
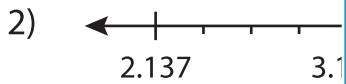
$125 =$ _____

e) $4.366 + 2.625 =$ _____

$625 =$ _____

g) $7.116 + 0.3875 =$ _____

$875 =$ _____



a)
$$\begin{array}{r} 7.137 \\ + 0.750 \\ \hline \end{array}$$

d)
$$\begin{array}{r} 2.887 \\ + 4.000 \\ \hline \end{array}$$

e)
$$\begin{array}{r} 6.137 \\ + 1.250 \\ \hline \end{array}$$

f)
$$\begin{array}{r} 2.137 \\ + 3.750 \\ \hline \end{array}$$

g)
$$\begin{array}{r} 7.887 \\ + 0.250 \\ \hline \end{array}$$

h)
$$\begin{array}{r} 4.637 \\ + 2.500 \\ \hline \end{array}$$

i)
$$\begin{array}{r} 2.637 \\ + 5.000 \\ \hline \end{array}$$

j)
$$\begin{array}{r} 4.887 \\ + 1.750 \\ \hline \end{array}$$

k)
$$\begin{array}{r} 6.387 \\ + 0.500 \\ \hline \end{array}$$

l)
$$\begin{array}{r} 3.137 \\ + 4.250 \\ \hline \end{array}$$

PREVIEW

Gain complete access to the largest collection of worksheets in all subjects!

Members, please log in to download this worksheet.

Not a member? Please sign up to gain complete access.

www.mathworksheets4kids.com