

Name : _____

Division

4-digit/ 5-digit by 1-digit: S1

- 1) The Hogwarts library has 15,852 reference books arranged in 6 racks equally. How many books does each rack hold?



- 2) Jeremy withdrew \$1,000 from his account. On his way home, he stopped at the local grocer's shop. How many five dollar bills did he receive?




- 3) The E.T. parking lot can accommodate up to 5,000 vehicles at a time. How many vehicles can be parked on each level if there are 10 levels?

Gain complete access to the largest collection of worksheets in all subjects!

Members, please log in to download this worksheet.

Not a member? Please sign up to gain complete access.




- 4) Gina is employed at a store and earns \$2,296 a month. How much does she earn a week?

www.mathworksheets4kids.com



- 5) A ski resort is spread over 5,288 acres. The resort is split equally into 4 key areas. How many acres will each key area comprise of?



Name : _____

Answer Key

Division

4-digit/ 5-digit by 1-digit: S1

- 1) The Hogwarts library has 15,852 reference books arranged in 6 racks equally. How many books does each rack hold?



2,642 books

- 2) Jeremy withdrew \$1,000 from his account. On his way home, he stopped at the local grocer's shop. How many five dollar bills did he use?

200 five



- 3) The E.T. parking lot can accommodate up to 5,000 vehicles at a time. How many vehicles can be parked on the lot if it is divided into 8 equal sections?


625

Gain complete access to the largest collection of worksheets in all subjects!

Members, please log in to download this worksheet.

Not a member? Please sign up to gain complete access.

www.mathworksheets4kids.com




- 4) Gina is employed at a store and earns \$2,296 a month. How much does she earn a total of if she works for 4 months?

\$574



- 5) A ski resort is spread over 5,288 acres. The resort is split equally into 4 key areas. How many acres will each key area comprise of?



1,322 acres