


Name : _____

Division

4-digit/ 5-digit by 1-digit: S2

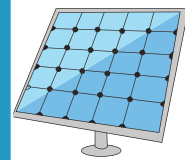
- 1) Five making lines in a chocolate factory can churn out 10,000 tons of liquid chocolate in a year. How many tons of liquid chocolate can one making line in the chocolate factory produce in a year?




- 2) The Disney's All-Star Movies Resort in Orlando, Florida, has 1,920 rooms spread over four floors. How many rooms are there on each floor?



- 3) Heather installed solar panels on her house. She used 1,200 kilowatt-hours of electricity in the month of June 2018. How many kilowatt-hours of electricity did she consume per week?



- 4) The Big Bang Theatre has 1,800 seats. The theatre is divided into 9 sections. How many seats are there in each section?



- 5) Mike, John, and Ryan collectively spent \$93,381 on their international holiday. They decide to split the expenses equally. What is the amount each person should contribute for a fair sharing of costs?



PREVIEW

Gain complete access to the largest collection of worksheets in all subjects!

Members, please log in to download this worksheet.

Not a member? Please sign up to gain complete access.

www.mathworksheets4kids.com