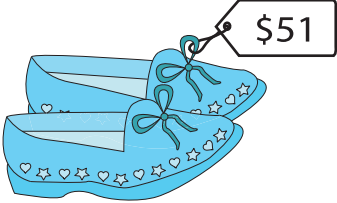



Name : _____



Cost of Objects

Sheet 1


Find the cost of the objects.


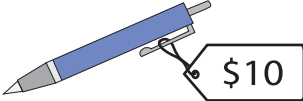
1)  +  = \$79; a = _____

2)  +  = \$100; z = _____

3)  +  = \$100; p = _____

4)  +  = \$93; t = _____

5)  +  = \$93; t = _____

6)  -  = \$10; g = _____

PREVIEW

Gain complete access to the largest collection of worksheets in all subjects!

Members, please log in to download this worksheet.

Not a member? Please sign up to gain complete access.

www.mathworksheets4kids.com