
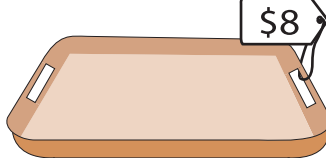


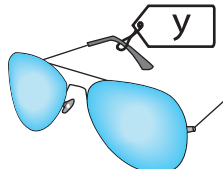


**Cost of Objects**

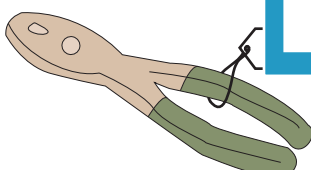
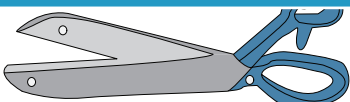
Find the cost of the objects.

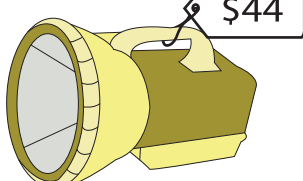

1)  -  = \$10; w = \_\_\_\_\_

2)  -  = \_\_\_\_\_; b = \_\_\_\_\_

3)  = \_\_\_\_\_; y = \_\_\_\_\_

4)  = \_\_\_\_\_; c = \_\_\_\_\_

5)  -  = \$62; k = \_\_\_\_\_

6)  +  = \$51; m = \_\_\_\_\_

**PREVIEW**

Gain complete access to the largest collection of worksheets in all subjects!

Members, please log in to download this worksheet.

Not a member? Please sign up to gain complete access.

[www.mathworksheets4kids.com](http://www.mathworksheets4kids.com)