
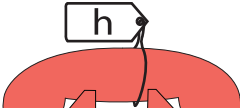
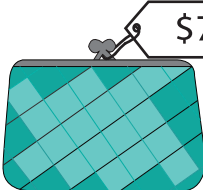


## Cost of Objects

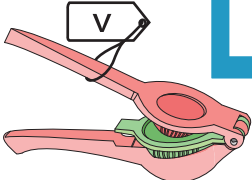

Find the cost of the objects.


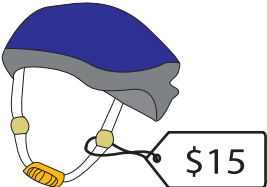
1)  -  = \$13; s = \_\_\_\_\_

2)  +  = \_\_\_\_\_; h = \_\_\_\_\_

3)  + \_\_\_\_\_ = \_\_\_\_\_; m = \_\_\_\_\_

4)  + \_\_\_\_\_ = \_\_\_\_\_; g = \_\_\_\_\_

5)  +  = \$28; v = \_\_\_\_\_

6)  -  = \$4; k = \_\_\_\_\_

# PREVIEW

Gain complete access to the largest  
collection of worksheets in all subjects!

Members, please  
log in to  
download this  
worksheet.

Not a member?  
Please sign up to  
gain complete  
access.

www.mathworksheets4kids.com