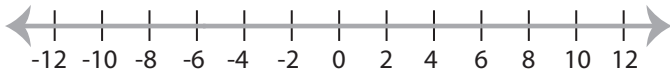


## Solving & Graphing Inequalities

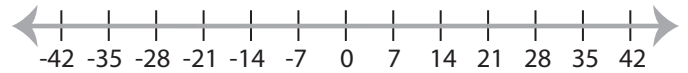
ES1

Solve each inequality and graph the solution.

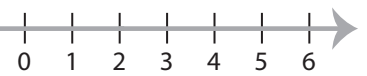
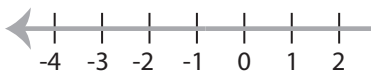
1)  $x - 2 > 4$



2)  $\frac{x}{3} \leq 7$



3)  $6x < 30$



# PREVIEW

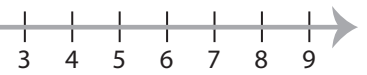
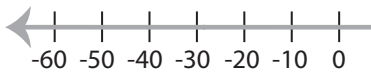
Gain complete access to the largest  
collection of worksheets in all subjects!

Members, please  
log in to  
download this  
worksheet.

Not a member?  
Please sign up to  
gain complete  
access.

[www.mathworksheets4kids.com](http://www.mathworksheets4kids.com)

5)  $\frac{x}{2} \geq 10$



7)  $7 + x < 16$



8)  $4x \geq 32$

