

Name : _____

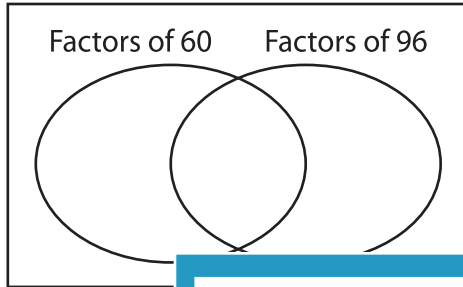
GCF - Venn Diagram

MS1

Find the greatest common factor for each pair of numbers using Venn diagram.

1) 60, 96

a) Complete the venn diagram.

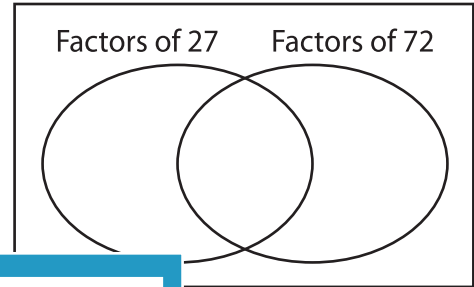


b) Common factors are _____

c) $GCF(60, 96) =$ _____

2) 27, 72

a) Complete the venn diagram.




b) Common factors are _____

c) $GCF(27, 72) =$ _____

3) 45, 30

a) Complete the venn diagram.



b) Common factors are _____

c) $GCF(45, 30) =$ _____

PREVIEW
Gain complete access to the largest collection of worksheets in all subjects!

Members, please log in to download this worksheet.

Not a member? Please sign up to gain complete access.

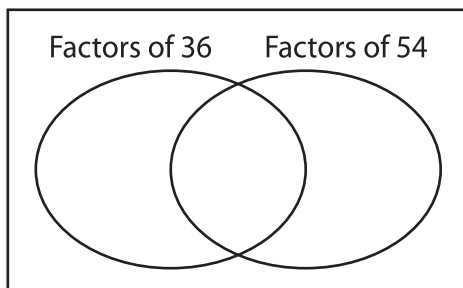
www.mathworksheets4kids.com

b) Common factors are _____

c) $GCF(45, 30) =$ _____

5) 36, 54

a) Complete the venn diagram.



b) Common factors are _____

c) $GCF(36, 54) =$ _____

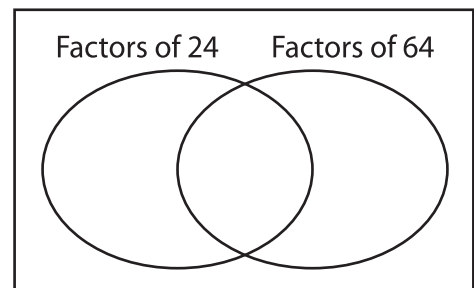
b) Common factors are _____

c) $GCF(45, 30) =$ _____

b) Common factors are _____

c) $GCF(45, 30) =$ _____

a) Complete the venn diagram.



b) Common factors are _____

c) $GCF(24, 64) =$ _____