

Name : _____

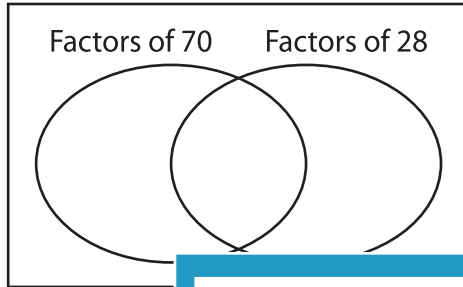
GCF - Venn Diagram

MS3

Find the greatest common factor for each pair of numbers using Venn diagram.

1) 70, 28

a) Complete the venn diagram.

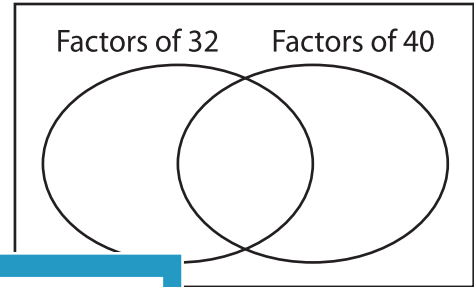


b) Common factors are _____

c) $GCF(70, 28) =$ _____

2) 32, 40

a) Complete the venn diagram.




b) Common factors are _____

c) _____

3) 24, 36

a) Complete the



b) Common factors are _____

c) $GCF(24, 36) =$ _____

Gain complete access to the largest collection of worksheets in all subjects!

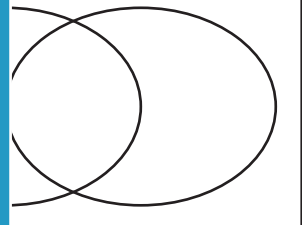
Members, please log in to download this worksheet.

Not a member? Please sign up to gain complete access.

www.mathworksheets4kids.com

venn diagram.

Factors of 63 Factors of 99

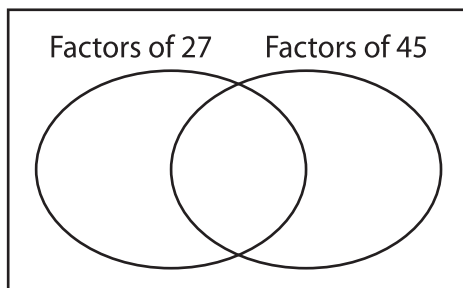


b) Common factors are _____

c) _____

5) 27, 45

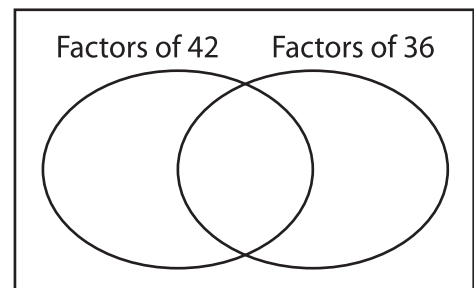
a) Complete the



b) Common factors are _____

c) $GCF(27, 45) =$ _____

venn diagram.



b) Common factors are _____

c) $GCF(42, 36) =$ _____