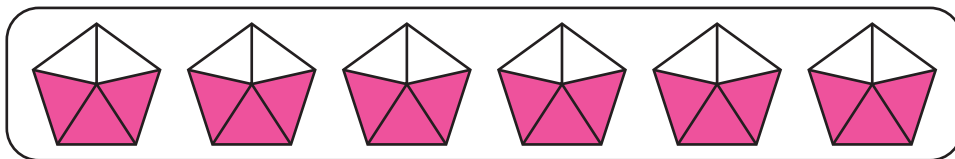


## Multiplying Fractions - Models

A) 1)




a) How many  $\frac{1}{5}$  parts in the model above are shaded?

$$6 \times \frac{3}{5} = \underline{\hspace{2cm}} \times \frac{1}{5}$$

b)  $6 \times \frac{3}{5} = \underline{\hspace{2cm}}$

2)



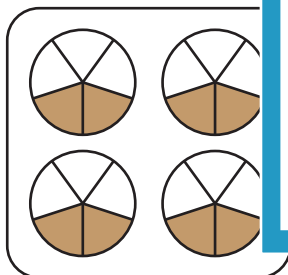
a) How many  $\frac{1}{4}$

$$5 \times \frac{2}{4} = \underline{\hspace{2cm}}$$

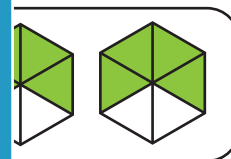
b)  $5 \times \frac{2}{4} = \underline{\hspace{2cm}}$

B) Write the multiplic

1)



parts in each model.



# PREVIEW

Gain complete access to the largest collection of worksheets in all subjects!

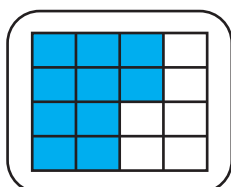
Members, please log in to download this worksheet.

Not a member? Please sign up to gain complete access.

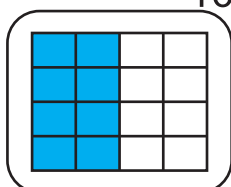
[www.mathworksheets4kids.com](http://www.mathworksheets4kids.com)

C) Which model represents the product  $1 \times \frac{7}{16}$ ?

a)



b)



c)

