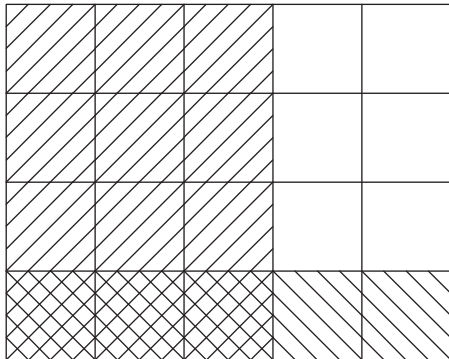


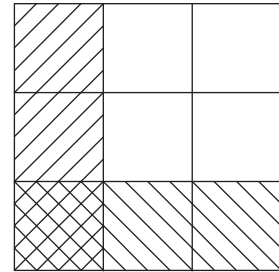
Multiplying Fractions - Area Model

Find the product using the area model.

1)

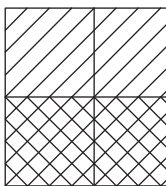


2)



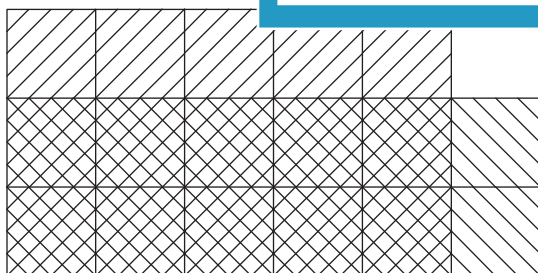
3) $\frac{3}{5} \times \frac{1}{4} =$ _____

3)



4) $\frac{2}{4} \times \frac{1}{2} =$ _____

5)



6) $\frac{5}{6} \times \frac{2}{3} =$ _____

7) $\frac{2}{2} \times \frac{3}{4} =$ _____

PREVIEW

Gain complete access to the largest collection of worksheets in all subjects!

Members, please log in to download this worksheet.

Not a member? Please sign up to gain complete access.

www.mathworksheets4kids.com