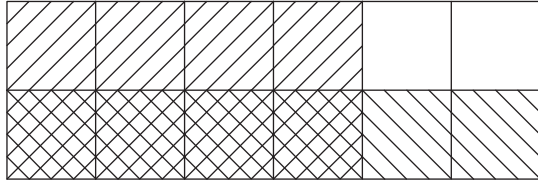


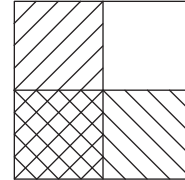
# Multiplying Fractions - Area Model

Find the product using the area model.

1)




2)



3)

$$\frac{4}{6} \times \frac{1}{2} = \underline{\hspace{2cm}}$$



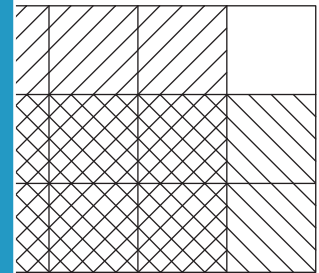
**PREVIEW**

Gain complete access to the largest collection of worksheets in all subjects!

Members, please log in to download this worksheet.

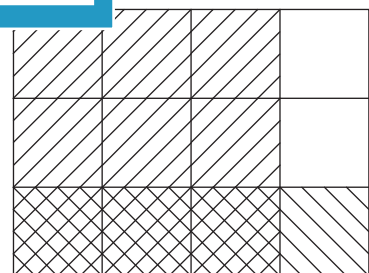

Not a member? Please sign up to gain complete access.

[www.mathworksheets4kids.com](http://www.mathworksheets4kids.com)



$$\frac{2}{3} \times \frac{3}{4} = \underline{\hspace{2cm}}$$

5)



$$\frac{5}{5} \times \frac{3}{5} = \underline{\hspace{2cm}}$$

$$\frac{3}{4} \times \frac{1}{3} = \underline{\hspace{2cm}}$$