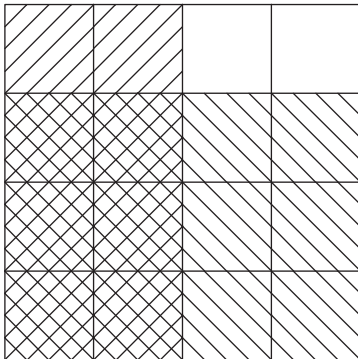


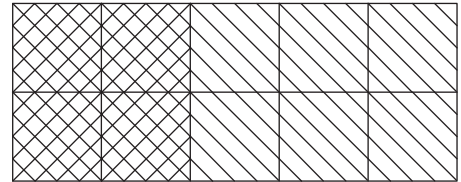
# Multiplying Fractions - Area Model

Find the product using the area model.

1)



2)



3)  $\frac{2}{4} \times \frac{3}{4} =$  \_\_\_\_\_

## PREVIEW

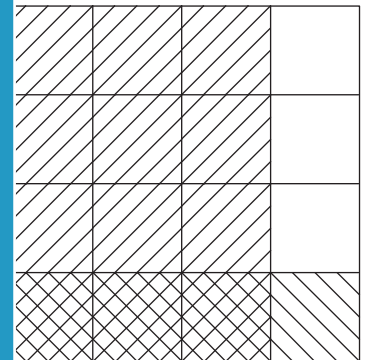
Gain complete access to the largest collection of worksheets in all subjects!

Members, please log in to download this worksheet.

Not a member? Please sign up to gain complete access.

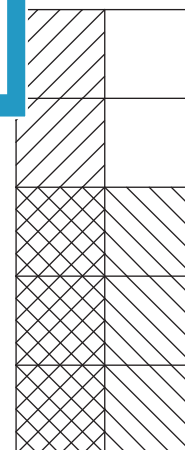
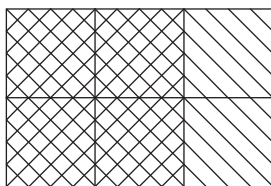
[www.mathworksheets4kids.com](http://www.mathworksheets4kids.com)

3)



4)  $\frac{1}{2} \times \frac{1}{3} =$  \_\_\_\_\_

5)



5)  $\frac{2}{3} \times \frac{2}{2} =$  \_\_\_\_\_

6)  $\frac{1}{2} \times \frac{3}{5} =$  \_\_\_\_\_