


Comparing Integers


Sheet 3

A) Circle the greater integer in each fish bowl.


1)




2)



3)



4)




PREVIEW

Gain complete access to the largest
collection of worksheets in all subjects!

Members, please
log in to
download this
worksheet.



Not a member?
Please sign up to
gain complete
access.

www.mathworksheets4kids.com




B) Circle the smaller integer in each fish bowl.


1)



4)



5)



6)

