

Opposite Integers

Sheet 1

A) Write the opposite value of each integer.

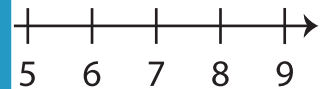
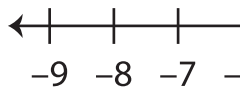
1) Opposite of 12 _____ 2) Opposite of -25 _____

3) Opposite of -99 _____ 4) Opposite of 4 _____

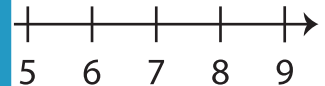
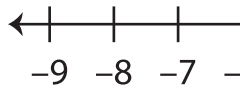
5) Opposite of 36 _____ 6) Opposite of -57 _____

B) Mark each integer on the number line.

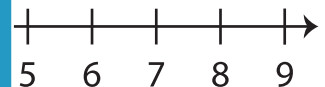
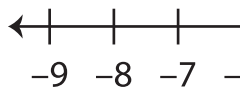
1) 2



2) -5



3) 1



C) Evaluate each expression.

1) Opposite of $-(-24)$ _____ 2) Opposite of $+(-8)$ _____3) Opposite of $+(+15)$ _____ 4) Opposite of $-(+33)$ _____5) Opposite of $+(-40)$ _____ 6) Opposite of $-(-6)$ _____

PREVIEW

Gain complete access to the largest
collection of worksheets in all subjects!

Members, please
log in to
download this
worksheet.

Not a member?
Please sign up to
gain complete
access.

www.mathworksheets4kids.com