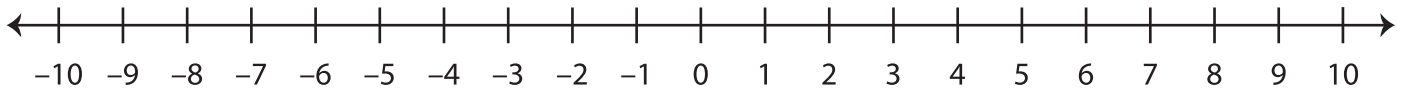


Ordering Integers

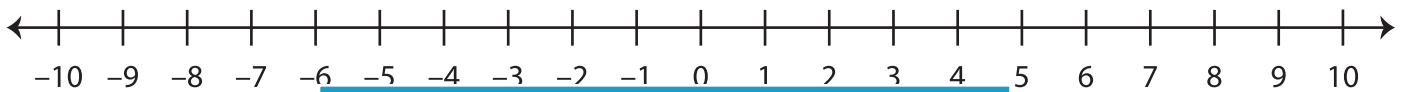
Sheet 1

A) Mark the integers on the number line and order them from the least to the greatest.

1) -9, 4, -5, 2



2) 10, 0, -3, -10



3) -7, 6, -8, 1



B) Mark the integers on the number line and order them from the least to the greatest.

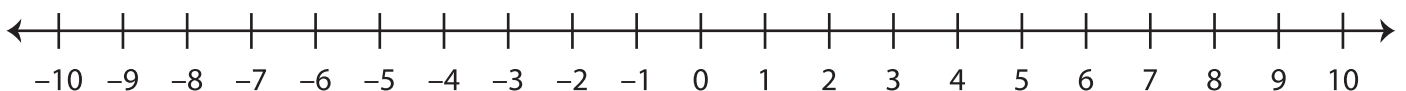
1) 3, -6, -4, 5



2) -2, -1, 9, -7



3) -5, 7, 8, -9



PREVIEW

Gain complete access to the largest
collection of worksheets in all subjects!

Members, please
log in to
download this
worksheet.

Not a member?
Please sign up to
gain complete
access.

www.mathworksheets4kids.com