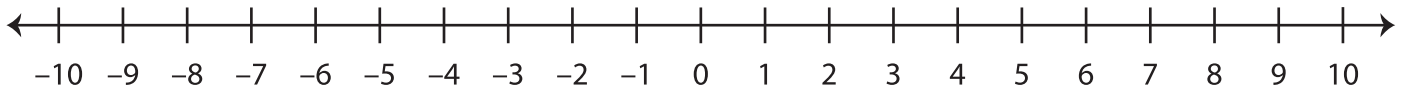


Ordering Integers

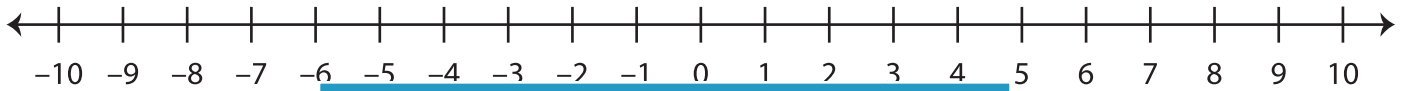
Sheet 2

A) Mark the integers on the number line and order them from the least to the greatest.

1) 1, -7, 9, -3



2) -2, 6, -8, 4



3) 5, 2, 10, -1



B) Mark the integers on the number line and order them from the least to the greatest.

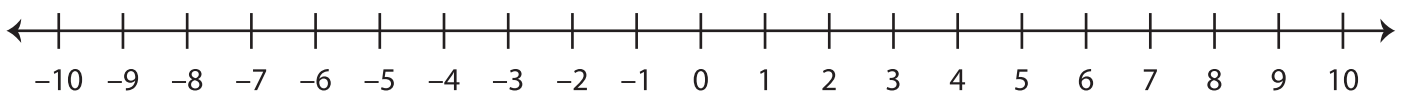
1) -9, -6, 8, -2



2) 5, -4, 3, 7



3) 0, -10, -8, 4



PREVIEW

Gain complete access to the largest
collection of worksheets in all subjects!

Members, please
log in to
download this
worksheet.

Not a member?
Please sign up to
gain complete
access.

www.mathworksheets4kids.com