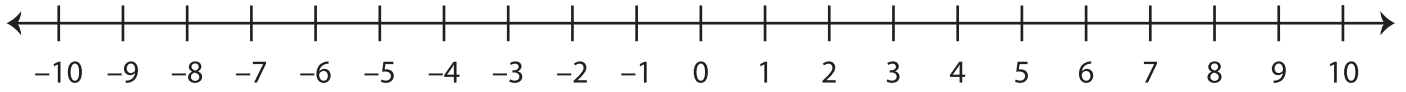


Ordering Integers

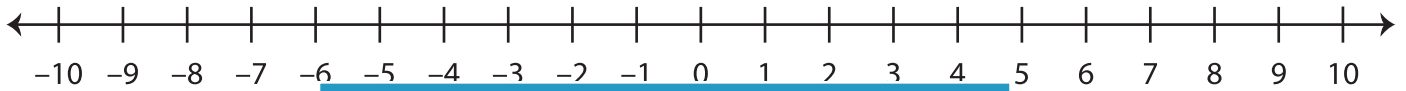
Sheet 3

A) Mark the integers on the number line and order them from the least to the greatest.

1) 6, 0, -10, 8



2) 1, -4, 7, -2



3) 4, -3, -5, -9



B) Mark the integers on the number line and order them from the least to the greatest.

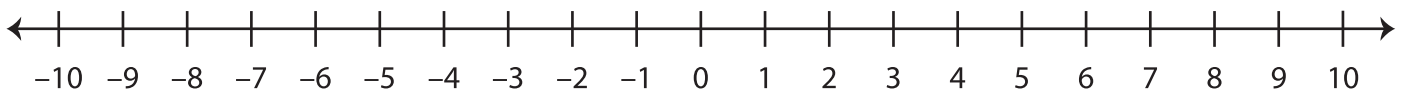
1) -8, 10, 3, -1



2) 9, -6, 0, -10



3) 5, -7, -9, 2



PREVIEW

Gain complete access to the largest
collection of worksheets in all subjects!

Members, please
log in to
download this
worksheet.

Not a member?
Please sign up to
gain complete
access.

www.mathworksheets4kids.com