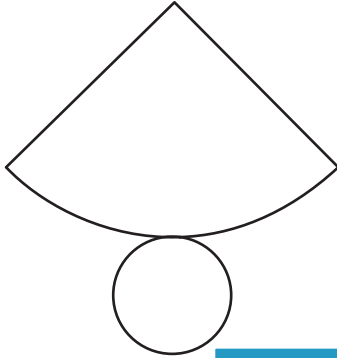


Name : _____

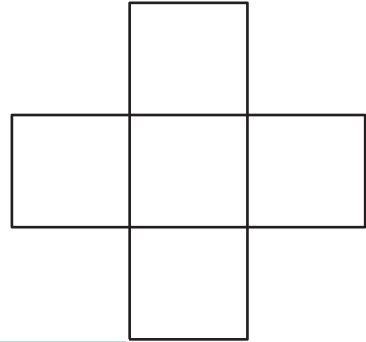
Is It a Net?

Determine if these are nets of 3D shapes and name the shapes if they are.

1)



2)



3)



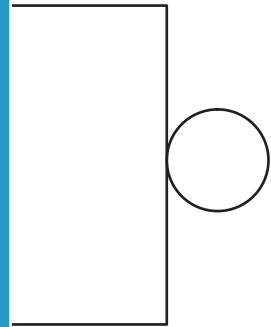
PREVIEW

Gain complete access to the largest collection of worksheets in all subjects!

Members, please log in to download this worksheet.

Not a member? Please sign up to gain complete access.

www.mathworksheets4kids.com



5)

