

Name : _____

Box-and-Whisker Plot

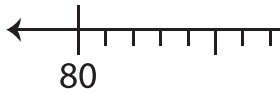
Level 1: S2

Make box-and-whisker plots for the given data.

1) 109, 94, 87, 103, 89, 112, 98, 115, 99

Minimum : _____ Maximum : _____

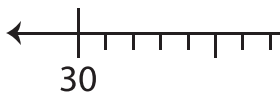
Q_1 : _____ Q_2 : _____ Q_3 : _____



2) 45, 56, 38, 52, 61

Minimum : _____

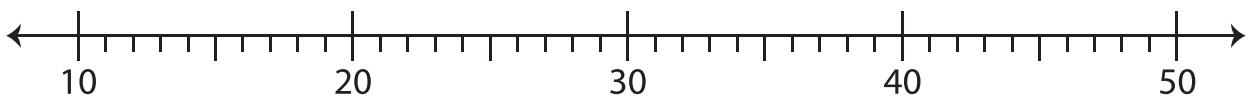
Q_1 : _____ Q_3 : _____



3) 39, 22, 16, 30, 44

Minimum : _____ Maximum : _____

Q_1 : _____ Q_2 : _____ Q_3 : _____



PREVIEW

Gain complete access to the largest collection of worksheets in all subjects!

Members, please log in to download this worksheet.

Not a member? Please sign up to gain complete access.

www.mathworksheets4kids.com